

ESCOLA: _____


NOME: _____

PROFESSOR: _____ DATA: ___/___/___




ADIÇÃO

1 - Desenhe bolinhas nas joaninhas de acordo com as operações indicadas. Depois, escreva os resultados.




$5+4=9$




$2+7=$



$9+3=$




$12+7=$




$22+5=$




$10+3=$




$6+2=$




$8+3=$




$7+5=$



$7+3=$



$12+5=$



$10+2=$